

Name: _____

INCOMING 3RD GRADE

Summer WORK

Writing

- Students will write in a prayer journal at least 8 times during the summer. They need to include thanksgiving for answered prayers and blessings, confessions, and requests. These need to be written in complete sentences with proper punctuation and capitalization.

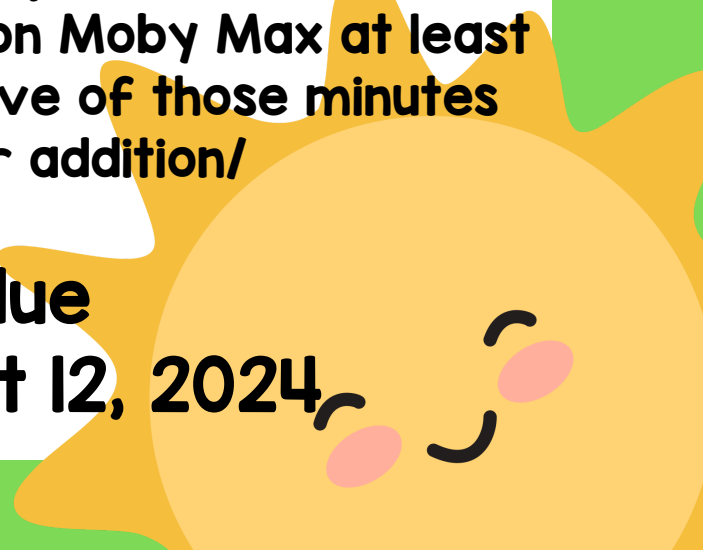
Reading

- Read *The Secret of the Flying Scrolls*, The Beginning book I. Complete a Croc Book Report. Instructions included.

Math

- Complete the summer math practice sheets.
- Optional/ Suggested-Work on Moby Max at least 3 times a week or 15 min. Five of those minutes need to be fact fluency for addition/subtraction.

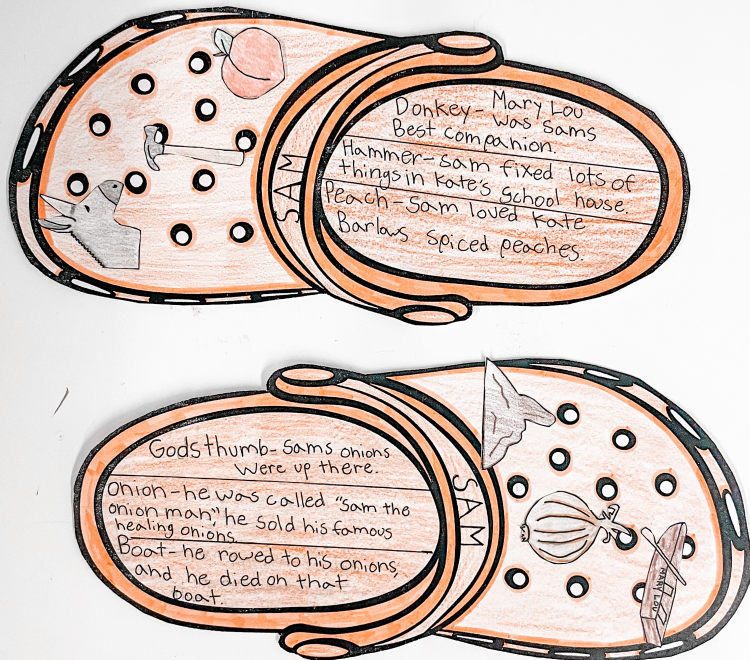
Packet due
Monday, August 12, 2024



INSTRUCTIONS/TIPS FOR USE

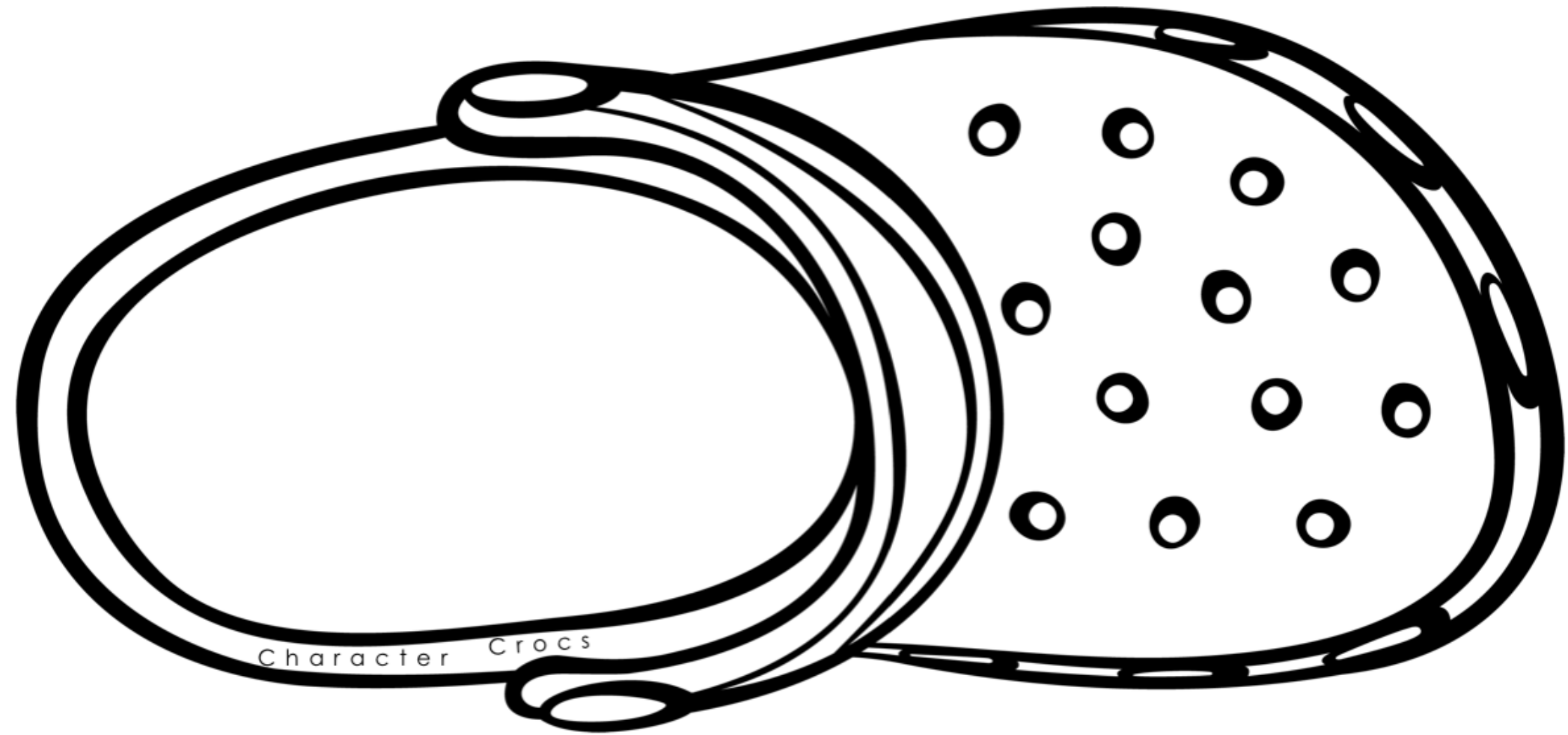
Teacher Instructions:

- Print one copy of the left shoe AND the right shoe (pg 2-3) for each student
- Print page 4 & cut into fourths. Give each student 6 boxes to create their 6 jibbitz / charms for their character

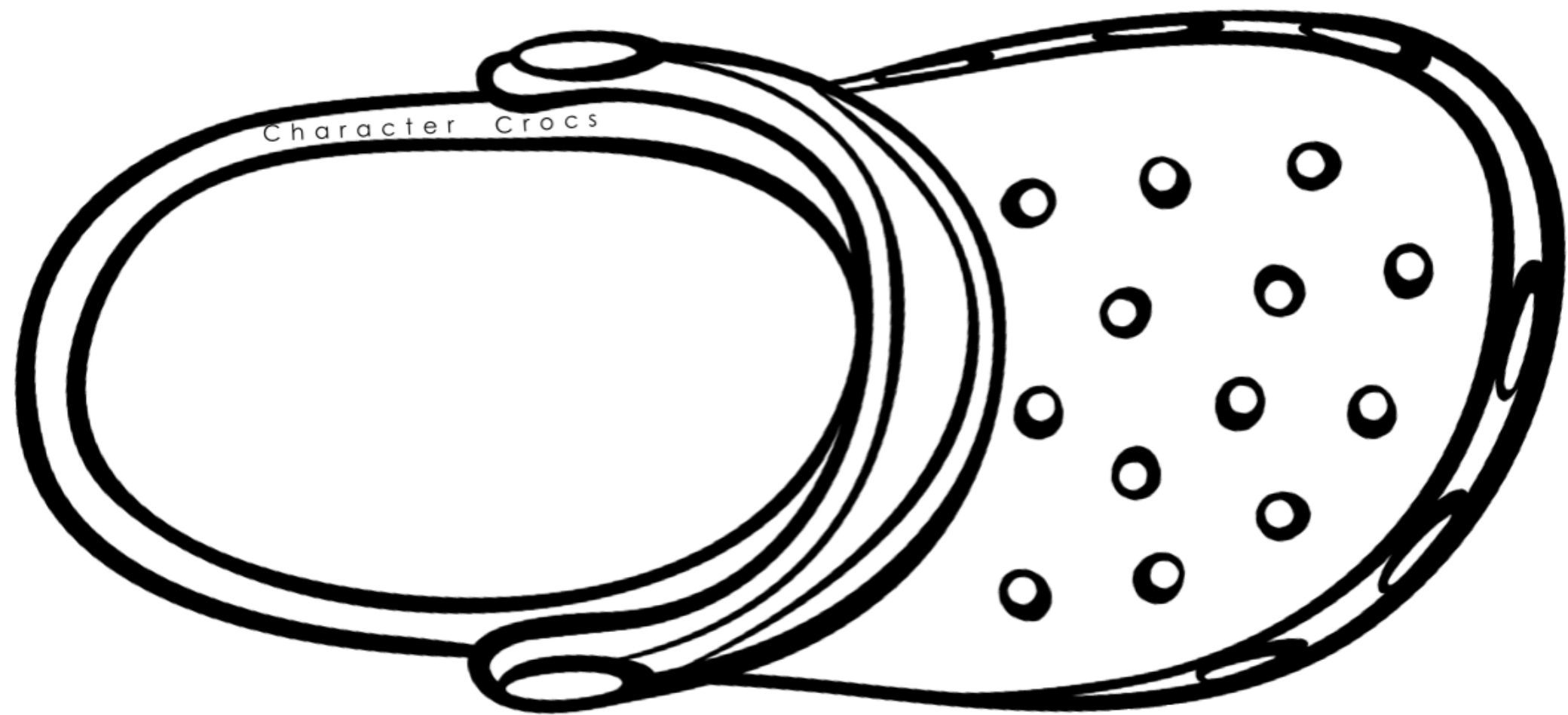


Student Instructions

- Choose one character from the novel
- Imagine your character had a pair of crocs – what 6 charms would they put on their crocs?
- Design 6 charms that represent your character. Draw, color, and cut out each charm. Color and decorate the shoes too, then glue the charms onto the shoes
- Write a sentence for each charm, explaining why that charm represents your character, their personality, their relationships, or their journey throughout the story
- Cut out each shoe when all done!



Left



Right

CROC BOOK REPORT INSTRUCTIONS

- Choose one character from the novel
- Imagine your character had a pair of crocs – what 6 charms would they put on their crocs?
- Design 6 charms that represent your character. Draw, color, and cut out each charm. Color and decorate the shoes too, then glue the charms onto the shoes
- Write a sentence for each charm, explaining why that charms represents your character, their personality, their relationships, or their journey throughout the story
- Cut out each shoe when all done!

CROC BOOK REPORT INSTRUCTIONS

- Choose one character from the novel
- Imagine your character had a pair of crocs – what 6 charms would they put on their crocs?
- Design 6 charms that represent your character. Draw, color, and cut out each charm. Color and decorate the shoes too, then glue the charms onto the shoes
- Write a sentence for each charm, explaining why that charms represents your character, their personality, their relationships, or their journey throughout the story
- Cut out each shoe when all done!

CHARACTER CROCS

Charm	Explanation

CHARACTER CROCS

CHARACTER CROCS

CROC BOOK REPORT RUBRIC


Your Name	Book Title			Character's Name
	4	3	2	1
Neatness & Presentation	The project has no distracting errors, corrections or erasures and is easily read. It appears the student spent a lot of effort getting things just right.	The project has almost no distracting errors, corrections or erasures and is easily read. It appears the student worked hard on it.	The project is fairly readable but the quality is not too good on some parts. It looks like the student ran out of time or didn't take care of it.	Very messy and hard to read. It looks like the student threw it together at the last minute without much care.
Spelling & Grammar	There are no spelling or grammatical mistakes on the project.	There is 1 spelling or grammatical mistake on the project.	There are 2-3 spelling or grammatical mistakes on the project.	There are more than 3 spelling or grammatical mistakes on the project.
Content Knowledge	All 6 charms serve as an accurate representation of the character and the justifying sentences strongly explain why.	All 6 charms serve as an accurate representation of the character and the justifying sentences somewhat strongly explain why.	Most of the charms serve as an accurate representation of the character and the justifying sentences explain why.	Few of the charms serve as an accurate representation of the character and/or the justifying sentences do not explain why.
Illustrations	Illustrations were creative, drawn and colored neatly and were a good size.	Illustrations were drawn and colored neatly and were a good size.	Illustrations were drawn and colored neatly, but some were too large or too small.	Illustrations were drawn and/or colored carelessly.
Requirements	All required components (6 charms, book title, author, character's name, and description of each charm) are included and executed with care.	All required components (6 charms, book title, author, character's name, and description of each charm) are included, but some may be messy.	All required components (6 charms, book title, author, character's name, and description of each charm) are included except 1-2.	More than 3 required components (6 charms, book title, author, character's name, and description of each charm) are missing.

PLACE VALUE PICNIC


Match all the foods with the correct picnic basket.



1 hundred
3 ones
7 tens




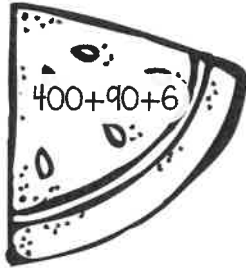
one-hundred
seventy-three




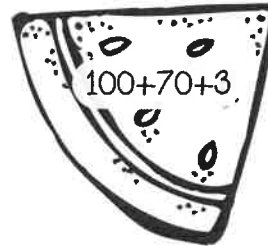
eight-hundred
thirty-two




8 hundreds
3 tens
2 ones



284



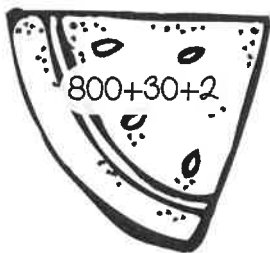
four-hundred
ninety-six




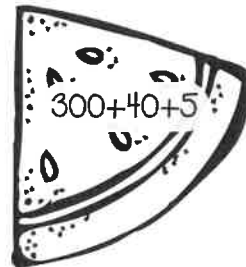
496




3 hundreds
5 ones
4 tens



4 ones
2 hundreds
8 tens





three-hundred
forty-five




173



4 hundreds
9 tens
6 ones



832



two-hundred
eighty-four

DIVING INTO DOUBLE-DIGIT MATH

Solve each double-digit math problem. CHECK THE OPERATION SYMBOL!!

$$\begin{array}{r} 25 \\ + 37 \\ \hline \end{array}$$

$$\begin{array}{r} 43 \\ - 15 \\ \hline \end{array}$$

$$\begin{array}{r} 42 \\ + 19 \\ \hline \end{array}$$

$$\begin{array}{r} 54 \\ + 36 \\ \hline \end{array}$$

$$\begin{array}{r} 91 \\ - 38 \\ \hline \end{array}$$

$$\begin{array}{r} 17 \\ + 17 \\ \hline \end{array}$$

$$\begin{array}{r} 30 \\ + 43 \\ \hline \end{array}$$

$$\begin{array}{r} 70 \\ - 25 \\ \hline \end{array}$$

$$\begin{array}{r} 84 \\ - 66 \\ \hline \end{array}$$

$$\begin{array}{r} 29 \\ + 41 \\ \hline \end{array}$$

$$\begin{array}{r} 59 \\ - 37 \\ \hline \end{array}$$

$$\begin{array}{r} 53 \\ + 29 \\ \hline \end{array}$$

$$\begin{array}{r} 72 \\ + 27 \\ \hline \end{array}$$


$$\begin{array}{r} 63 \\ - 22 \\ \hline \end{array}$$

$$\begin{array}{r} 61 \\ + 35 \\ \hline \end{array}$$

$$\begin{array}{r} 99 \\ - 48 \\ \hline \end{array}$$

$$\begin{array}{r} 80 \\ - 48 \\ \hline \end{array}$$

$$\begin{array}{r} 55 \\ + 45 \\ \hline \end{array}$$



RIDING THE TRIPLE DIGIT TIDAL WAVE

Solve each triple-digit math problem. CHECK THE OPERATION SYMBOL!!

$$\begin{array}{r} 524 \\ + 178 \\ \hline \end{array}$$

$$\begin{array}{r} 357 \\ + 254 \\ \hline \end{array}$$

$$\begin{array}{r} 468 \\ - 139 \\ \hline \end{array}$$

$$\begin{array}{r} 999 \\ - 473 \\ \hline \end{array}$$

$$\begin{array}{r} 146 \\ + 274 \\ \hline \end{array}$$

$$\begin{array}{r} 731 \\ - 358 \\ \hline \end{array}$$

$$\begin{array}{r} 621 \\ + 393 \\ \hline \end{array}$$

$$\begin{array}{r} 266 \\ + 365 \\ \hline \end{array}$$

$$\begin{array}{r} 524 \\ - 239 \\ \hline \end{array}$$

$$\begin{array}{r} 730 \\ - 165 \\ \hline \end{array}$$

$$\begin{array}{r} 438 \\ + 255 \\ \hline \end{array}$$

$$\begin{array}{r} 600 \\ - 156 \\ \hline \end{array}$$

$$\begin{array}{r} 471 \\ + 336 \\ \hline \end{array}$$


$$\begin{array}{r} 504 \\ - 243 \\ \hline \end{array}$$

$$\begin{array}{r} 683 \\ + 148 \\ \hline \end{array}$$

$$\begin{array}{r} 700 \\ - 367 \\ \hline \end{array}$$

$$\begin{array}{r} 275 \\ + 536 \\ \hline \end{array}$$

$$\begin{array}{r} 815 \\ - 349 \\ \hline \end{array}$$



WAVES OF WORD PROBLEMS

Solve each word problem below. Make sure to read the whole problem – some are 2 steps!

Claire's family went to the beach for summer vacation. She picked up 32 seashells on Monday. She picked up 49 more on Wednesday. On Thursday, she threw out 5 that were broken. How many seashells does Claire have left?



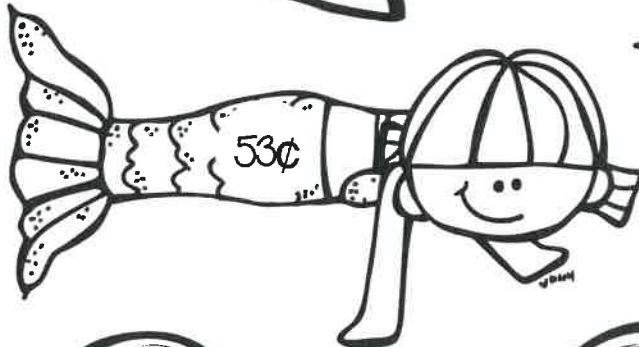


Jeffrey and his dad went to Disney World this summer. They rode 24 rides at Magic Kingdom and 17 rides at Epcot. How many more times did they ride rides at Magic Kingdom than Epcot?

Max made strawberry lemonade to sell at his lemonade stand this summer. If he sold 10 cups a day for a week (7 days), how many cups of strawberry lemonade would Max sell in a week?

Bailey and her sister filled their swimming pool up with water. They used 23 gallons of water. During a thunderstorm, 3 more gallons of rain water fell in the pool. The next day, the girls dumped 8 gallons of water out of the pool. How many gallons of water are left in the pool?

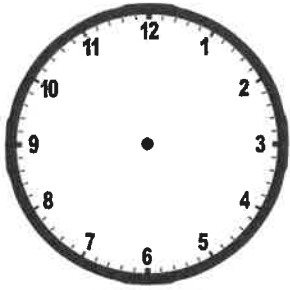
MONEY UNDER THE SEA

Match each clam shell of coins with the correct mermaid.




POOL TIME!

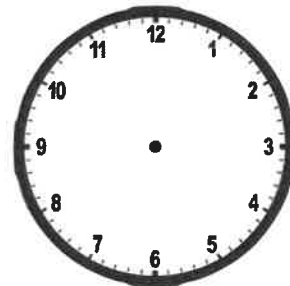
Draw the hands on the clock or write the time in the analog clock box.




4:30





10:45




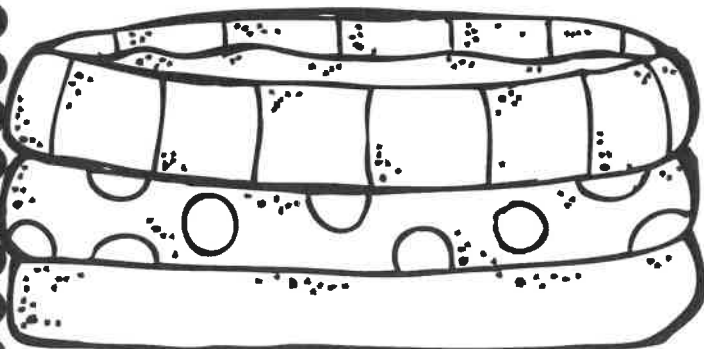

8:05



12:30



11:25



encl

SUMMER FUN BAR GRAPHS

Use the data table to make a bar graph. Then, answer the questions about your data/graph.

Favorite Summer Activity	
Camping	5
Swimming	8
Fishing	4
Surfing	6



Title: _____				
8				
7				
6				
5				
4				
3				
2				
1				
	Camping	Swimming	Fishing	Surfing

- Which summer activity is liked the most? _____
- Which summer activity was the least favorite? _____
- How many more children like swimming than camping? _____
- If you had voted in this poll, how would the graph change? _____

- How many children voted in all in this poll? _____